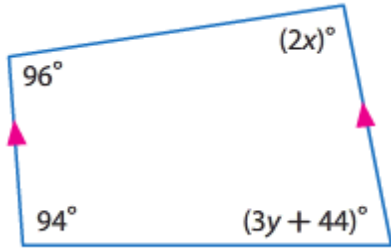


LT 1.2 Skills Practice #3: Algebra

Angles and Parallel Lines

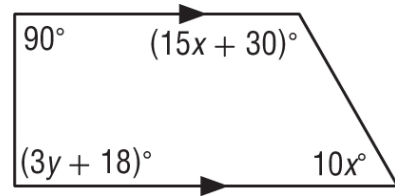
Find the value of the variable(s) in each figure. Explain your reasoning (Justification).

1. What do we know from the picture?



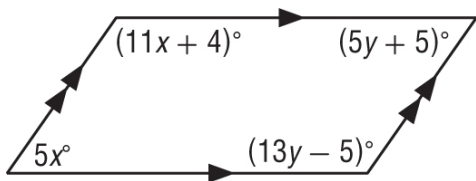
Statement	Justification

2. What do we know from the picture?



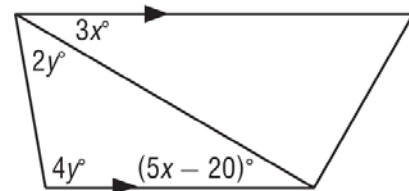
Statement	Justification

3. What do we know from the picture?



Statement	Justification

4. What do we know from the picture?



Statement	Justification