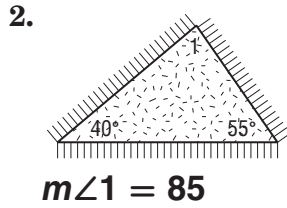
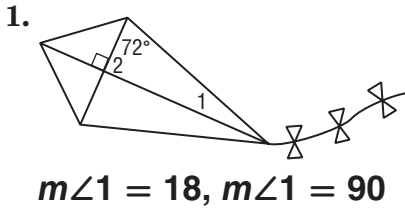


4-2 Practice

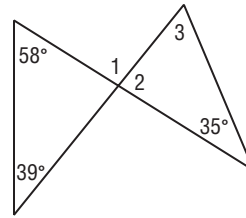
Angles of Triangles

Find the measure of each numbered angle.



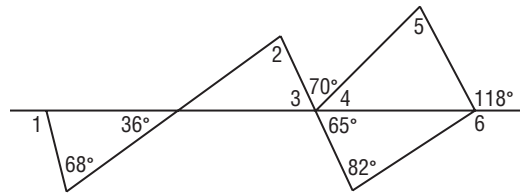
Find each measure.

- 3. $m\angle 1$ 97
- 4. $m\angle 2$ 83
- 5. $m\angle 3$ 62



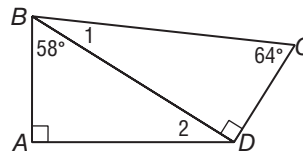
Find each measure.

- 6. $m\angle 1$ 104
- 7. $m\angle 4$ 45
- 8. $m\angle 3$ 65
- 9. $m\angle 2$ 79
- 10. $m\angle 5$ 73
- 11. $m\angle 6$ 147



Find each measure.

- 12. $m\angle 1$ 26
- 13. $m\angle 2$ 32



14. **CONSTRUCTION** The diagram shows an example of the Pratt Truss used in bridge construction. Use the diagram to find $m\angle 1$.
- 55**

