

4-2 Skills Practice

Angles of Triangles

Find the measure of each numbered angle.



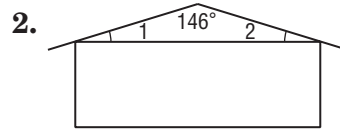
$m\angle 1 = 27$

Find each measure.

3. $m\angle 1 = 55$

4. $m\angle 2 = 55$

5. $m\angle 3 = 70$



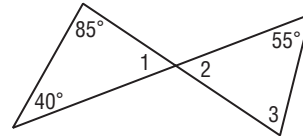
$m\angle 1 = m\angle 2 = 17$

Find each measure.

6. $m\angle 1 = 125$

7. $m\angle 2 = 55$

8. $m\angle 3 = 95$



Find each measure.

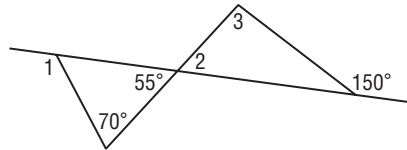
9. $m\angle 1 = 140$

10. $m\angle 2 = 40$

11. $m\angle 3 = 65$

12. $m\angle 4 = 75$

13. $m\angle 5 = 115$



Find each measure.

14. $m\angle 1 = 27$

15. $m\angle 2 = 27$

